

けいさん

■ 計算をしましょう。

$21 \div 3 =$	$20 \div 5 =$	$1 \div 1 =$	$35 \div 5 =$	$9 \div 3 =$
$4 \div 2 =$	$12 \div 3 =$	$36 \div 9 =$	$18 \div 3 =$	$56 \div 8 =$
$40 \div 8 =$	$36 \div 4 =$	$10 \div 2 =$	$72 \div 9 =$	$12 \div 2 =$
$49 \div 7 =$	$3 \div 1 =$	$12 \div 6 =$	$16 \div 4 =$	$28 \div 7 =$
$24 \div 3 =$	$35 \div 7 =$	$25 \div 5 =$	$63 \div 9 =$	$15 \div 5 =$
$48 \div 8 =$	$24 \div 4 =$	$24 \div 8 =$	$4 \div 1 =$	$45 \div 9 =$
$48 \div 6 =$	$81 \div 9 =$	$28 \div 4 =$	$64 \div 8 =$	$7 \div 1 =$
$10 \div 5 =$	$3 \div 3 =$	$20 \div 4 =$	$14 \div 7 =$	$30 \div 5 =$

かず か

■ □にあてはまる数を書きましょう。

$8\text{km} = \square \text{ m}$

$1\text{km}80\text{m} = \square \text{ m}$

$8\text{km} - 6\text{km} = \square \text{ km}$

$9\text{km} + 6\text{km} = \square \text{ km}$

$3\text{km}200\text{m} + 200\text{m} = \square \text{ km} \square \text{ m}$

$7090\text{m} = \square \text{ km} \square \text{ m}$

$5\text{km}500\text{m} - 100\text{m} = \square \text{ km} \square \text{ m}$

$4\text{km}700\text{m} + 2\text{km} = \square \text{ km} \square \text{ m}$

けいさん





■ 計算をしましょう。

83×15

84×71

11×61

80×62



かず か

■ □にあてはまる数を書きましょう。

